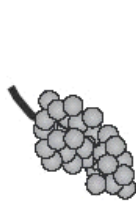



1. Amir and Lara buy some fruit.



grapes
£2.50
for 1 kilogram



pineapples
£1.40
each



peaches
£1.99
for a box

Amir buys 2 pineapples and a box of peaches.

How much does he pay? £.....

Lara buys half a kilogram
of grapes and one pineapple.

How much change does she get from £5?

Show
your **working**.
You may get
a mark.

£


2. Here are three bags in a shop

How much does bag B cost to the nearest pound?

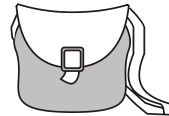


Jamie buys bag A and bag C.

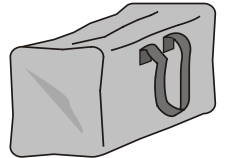
How much change does he get from £40?



A
£11.50



B
£14.65



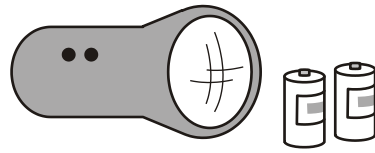
C
£16.50



Show
your **working**.
You may get
a mark.

£

3. A torch costs £7.65
Kate buys a torch and **two** batteries.
She pays £8.75 altogether.
How much does **one** battery cost?



Show your **working**.
You may get a mark.

£

4. A shop sells notebooks and pens.
Hassan bought a **notebook** and a **pen**.
He paid **£1.10**
Kate bought a **notebook** and **2 pens**.
She paid **£1.45**
Calculate the cost of a **notebook**.



Show your **working**.
You may get a mark.

5. A shop sells candles.



plain candles
35p each



star candles
60p each



stripe candles
85p each



Sapna buys **4** star candles and **2** stripe candles.

How much does she pay **altogether**?

 Show your **working**. You may get a mark. 

6. Each bag contains only one type of coin.
Complete this table to show how many coins are in each bag.

One has been done for you.



Type of coin	Number of coins
1p	160
10p	
20p	

7. A shop sells three types of sunglasses.
 What is the **difference** in price between the **most** expensive and **least** expensive sunglasses?




£.....

1 mark

The shop also sells sun hats.


Ryan buys the **£4.69 sunglasses** and a **sun hat**.

How much change does he get from **£10**?



Show your **working**.
 You may get a mark.

9. A shop sells scarves and hats.



Ben buys one of the scarves and the £4.50 hat.

How much change does he get from £20?



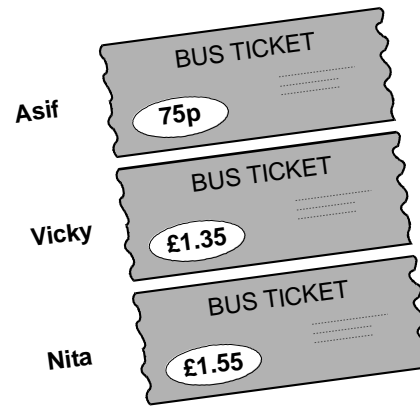

Show your **working**.
 You may get a mark.

£

10. Asif, Vicky and Nita go to town by bus.

This is what they pay.

How much **more** does **Nita** pay than **Asif**?



Vicky then takes **another** bus from town to visit her auntie.

She pays **90p** on this bus.

How much has Vicky paid **altogether** for her two bus tickets?



11. A shop sells greetings cards.

Each card has a price code on it.

These are the codes.

Tina buys two cards.

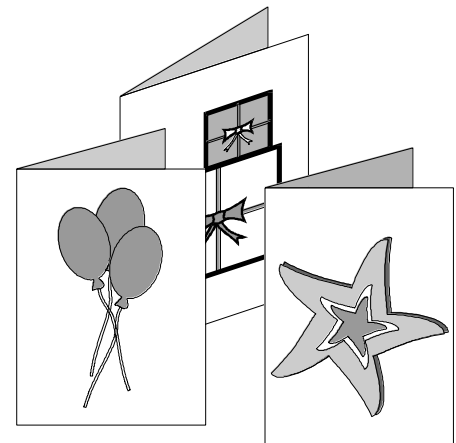
One card has code **AA** on it.

The other card has code **DD** on it.

How much does Tina pay?





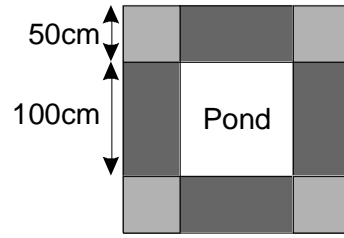
code	price
AA	75p
BB	£1.15
CC	£1.55
DD	£1.70
EE	£1.99



12. Mr Singh buys paving slabs to go around his pond.

PAVING SLABS

<p>£1.95 each</p> 	<p>Square slabs 50cm by 50cm</p>
<p>£3.50 each</p> 	<p>Rectangular slabs 100cm by 50cm</p>



He buys 4 rectangular
slabs and 4 square slabs.

What is the total
cost of the slabs he buys

Show
your **working**.
You may get
a mark.

£

13. Jason bought some bags of green apples
and some bags of red apples.

He spent **£4.20**



6 green apples for 75p

10 red apples for 90p

How many **bags** of each type of apples did he buy?

Show
your **working**.
You may get
a mark.

bags of
green apples

bags of
red apples

14. Lewis makes a call from a telephone box.

He has **£2** in coins.

He uses these five coins to make the call.




How much money has he got **left from the £2**?



15. This table shows the increase in bus fares.

Bus Fares	
old fare	new fare
42p	48p
52p	57p
60p	72p
75p	85p
90p	£1.05
£1.20	£1.28




Sohan's **new** bus fare is **72p**.

How much has his bus fare gone up? 

Millie says,

'My bus fare has gone up by 10p'.


16. How much is Millie's new bus fare? 

Book Sale
Any 3 books for £14.50



Lee bought **these three** books in the sale for **£14.50**

How much money did he save altogether compared to the **full price** of the books?

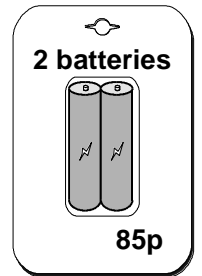
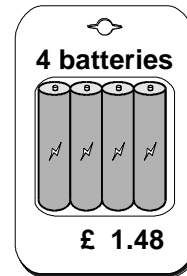
 Show your **working**. You may get a mark.

£

17. A shop sells batteries in **packs of four** and **packs of two**.

Simon and Nick want two batteries each.
They buy a **pack of four** and share the cost equally.

How much does each pay?



 Show your **working**. You may get a mark.


£

Hamid buys **1 pack of four**.

How much **more** does Mary pay than Hamid?

 Show your **working**. You may get a mark.

£




Daffodils
99p for a bunch



Roses
40p each


John buys 3 bunches of daffodils.

How much does he pay altogether? 

Karpal has **£4.00** to spend on **roses**.


How many **roses** can she buy for **£4.00**? 

19 Parveen buys 3 small bags of peanuts.



She gives the shopkeeper £2 and gets 80p change.

What is the cost in pence of one bag of peanuts?

 Show your **working**. You may get a mark.


p

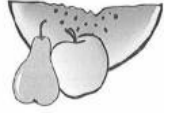
20. These are the prices of sandwiches, drinks and fruit.

Sandwiches		Drinks		Fruit	
cheese	£1.45	milk	55p	apple	15p
tuna	£1.70	cola	45p	pear	20p
salad	£1.20	juice	65p	melon	25p

Shereen buys a **tuna** sandwich, **milk** and a **pear**.


How much does she pay?





Mike has 80p to spend on a **fruit** and a **drink**.

What **two** things can he buy for exactly **80p**?

 and

21 This table shows how many journeys a taxi driver made on five days and how much money he collected.

	number of journeys	money collected
Monday	23	£85
Tuesday	36	£112
Wednesday	18	£69
Thursday	31	£124
Friday	35	£109

How much money did he collect on the day that he made the most journeys?



How much more money did he collect on Monday than on Wednesday?

