


Calculator Paper Questions


1. Write what the numbers in the boxes could be.

 $10 \times \square = \square - 10$

2. Two whole numbers are each **between 50 and 70**

They multiply to make 4095

Write in the missing numbers.

 $\square \times \square = 4095$

3. Write in the missing numbers.

 $35 \times \square = 140$ $633 - \square = 34$

4. Here is a number sentence.

$$\square + 27 > 85$$

Circle **all** the numbers below that make the number sentence correct.


 30 40 50 60 70

5. Write in the missing numbers.

 $3 \times 4 \times \square = 96$


$$\square + 62 - 46 = 96$$

6. Write in the missing numbers.

 $\div 21.7 = 37.5$

$100 - (22.75 + 19.08) =$

7. Write the **largest** whole number to make this statement true.

 $50 +$ < 73

8. Write in the missing numbers.

 $37 \times$ $= 111$

$225 -$ $= 150$

$\div 4 = 21$

9. Write in the missing numbers.


 $22 \times$ $= 660$

$- 75 = 109$

10. Write in the missing number.

 $32.45 \times$ $= 253.11$

11. Write in the **missing** number.

 $8 \times$ $= 400$

12. Write in what the missing numbers could be.

$$170 + \boxed{} = 220 - \boxed{}$$

13. Write in what the missing numbers could be.


$$\left(\boxed{} \div \boxed{} \right) + 90 = 100$$

14. Write in the missing number.



$$404.09 \div \boxed{} = 8.5$$

15. Write in the missing number.



$$60 + 99 + \boxed{} = 340$$


16. Write in what the **missing** numbers could be.


$$100 - \boxed{} = 38$$


$$\boxed{} \times \boxed{} = 65$$


$$160 \div \boxed{} = 40$$

17. Write in the missing number.


$$950.4 \div \boxed{} = 49.5$$